



## FOR THE TEACHER

CLASS	SUBJECT	LEARNING OBJECTIVES	LEARNING OUTCOMES	SUGGESTED ACTIVITY	METHODOLOGY	ASSESSMENT
IVth	EVS	<ul style="list-style-type: none"> <li>To enable the learners to develop critical thinking.</li> <li>To enable the learners to develop subject enrichment</li> <li>Logical Reasoning.</li> <li>learn and respect about environment</li> </ul>	<ul style="list-style-type: none"> <li>The learner will be able to know.</li> <li>How different living organism breathe.</li> <li>What is the Importance of oxygen for survival?</li> <li>How air play a vital role in our life?</li> <li>The learners will be able to recall, identify, illustrate and summarize.</li> </ul>	<ul style="list-style-type: none"> <li>Draw different breathing organs in living things.</li> <li>Make own video explaining different breathing organs present in living organisms.</li> </ul>  	<ul style="list-style-type: none"> <li>Taking help of your sibling, make a video talking about different breathing organs present in humans, fish, insects like cockroaches and plants.</li> <li>The student will also draw and label these.</li> </ul>	<p>The students will be assessed on their participation in the activity. The confidence and clarity of students will be observed.</p>

## FOR THE STUDENTS

### ACTIVITY:

Draw a well labeled diagram of a different.

. In column 1<sup>st</sup> write different breathing organs present in living things..

. In column 2<sup>nd</sup> write what do you want to know about these organs?

. In column 3<sup>rd</sup> write how these organs help us to survive..

. In column 4<sup>th</sup> write what do you learnt for this activity.

K (What I know about plants)	W (What I want to know)	H (How I learnt)	L (What I learnt)

## ACTIVITY

### Topic: Heart beat

**Procedure:** Put your right hand on the left side of your chest and notice the rate of your heart beat.

Now, take some physical exercise for e.g. Walking or pushups and immediately again check your rate of heart beat by placing your same hand on the left side of your chest.

Prepare a table showing the changes in your heart beat before and after taking exercise.

# ACTIVITY

- Collect leaves of different shapes from your garden and paste it on a sheet. (5 to 7 leaves)
- You are then required it to send it by next week.

CLAS S	SUBJEC T	LEARNING OBJECTIV ES	LEARNING OUTCOMES	SUGGESTED ACTIVITY	METHODOLOGY	ASSESSMENT
IV th	English	<p>To enable the learner to</p> <p>.Develop critical thinking</p> <p>.Develop descriptive vocabulary</p> <p>.Record observation</p> <p>.Ask questions based on observation</p>	<p>The learner will be able to know</p> <p>.About different spices present in their kitchen</p> <p>.To know English name of all spices.</p> <p>.To know about medical properties of spices.</p>	<p>. Look all the spices present in your kitchen. Learn English name of all spices. Find medicinal properties of all spices.</p>	<p>a. Search English name for all spices present in your kitchen (on Google)</p> <p>b. Discuss with your parents to find medicinal properties of these spices .</p>	<p>. The students will be assessed on their participation in the activity.</p>

### ACTIVITY: SPICE MAGIC

#### . Fill this table according your observation

- . In column 1<sup>st</sup> write Hindi name of each spice present in your kitchen.
- . In column 2<sup>nd</sup> write English name for all these spices.
- . In column 3<sup>rd</sup> write medicinal properties Of these spices.

# EVALUATION SHEET: 2(EVS)

## CHAPTER 2

## INSIDE OUR BODY

A- Tick the correct answer:

1. Which of the following protects our heart and lungs?

- ❖ Ribcage
- ❖ Spinal cord
- ❖ Kidneys
- ❖ None of these

2. Which of the following makes our nervous system?

- ❖ Nerves
- ❖ Brain
- ❖ Spinal cord
- ❖ All of these

3. Where does digestion begin?

- ❖ Small intestine
- ❖ Mouth
- ❖ Large intestine
- ❖ None of these

# EVALUATION SHEET-3

## **FILL IN THE BLANKS**

**5 Marks**

1. \_\_\_\_\_ is the main root of the plant.
2. \_\_\_\_\_ is a dried flower buds.
3. Stomata are present on the \_\_\_\_\_ of the leaf.
4. Aerial roots are found in \_\_\_\_\_.
5. Radish is a \_\_\_\_\_ Root.

## **ONE WORD**

**3 Marks**

1. The flat broad part of the leaf is called?
2. Which is the green pigment present in plants.
3. Which part of the plant always grow vertically.

## **TRUE AND FALSE**

**2 Marks**

1. Plants is divided into 3 systems
2. Petals open into a beautiful; flowers

# **WORKSHEETS OF CLASS IVth**

## **MATHS**

### **Ch-1 NUMBERS AND NUMBER NAMES**

#### **Worksheet-1**

**1. Fill in the blanks:**

- a. The greatest 3 digit number is \_\_\_\_\_
- b. The smallest 5 digit number is \_\_\_\_\_
- c. 1 more than 7998 is \_\_\_\_\_
- d. 1 lakh= \_\_\_\_\_ thousands.
- e. 38709 = \_\_\_\_\_ ten-thousand \_\_\_\_\_ thousand  
\_\_\_\_\_ hundred \_\_\_\_\_ tens \_\_\_\_\_ ones.
- f.  $500000 + 7000 + 80 + 29 + 5 =$  \_\_\_\_\_

**2. Write the expanded form of the following:**

- a. 23591
- b. 40398
- c. 91025
- d. 40179
- e. 28650
- f. 70930

**3. Write the place value of the underlined digits:**

- a. 23434
- b. 360231
- c. 53809
- d. 45467
- e. 54219
- f. 19831

Army public school

Worksheet 2020-21

English. Class 4<sup>th</sup>

Chapter 1

Q) Fill in the blanks using the words from the story.

1) The animals of the forest... ..agreed to send one animal everyday to the lion, s den.

2) The jackal... ..walked slowly to the lion, s den.

3) The jackal very respectfully... ..for being late.

4) The jackal, s... ..saved the other animals.

Q) Answer the questions.

1) what kind of a king was the lion?

.....

2) What saved the lives of the animals of the forest?

.....

3) What excuse did the jackal give for being late?

.....

Q) Punctuate the following sentences.

1) is there a bank nearby

.....

2) what a wonderful song it is

.....

3) hari said I am not well today



Army public school

Worksheet 2020-21

English. Class 4<sup>th</sup>

Sentences

Q) Match the group of words to make sentences :

- A. Mahima is.               Heavily in monsoon
- B. Chimpanzees are.    In class 5 next year
- C. It rains.                 Ready for test
- D. You must.              Obey the traffic rules
- E. We shall be.         A badminton player
- F. Are you.                Very clever animal

Q) use these group of words and make sentences :

- A. A good friend... ..
- B. In a mall... ..
- C. Some food .....
- D. India is... ..

Q) Make meaningful sentence by using these group of words

- A. Do not -----
- B. Who will -----
- C. Does not -----
- D. In the class -----
- E. How lucky -----
- F. Solve this -----
- G. What a-----
- H. What do you -----

Army public school

Worksheet 2020-21

English. Class 4<sup>th</sup>

Chapter 4 ( the wind)

Q) complete the following sentences

The child poet watches the .....tossed around the sky, the... .....flying in the sky and listens to the sound of the wind like the rustling of... .....skirts across the grass. At times he can feel the wind... .....him and... .....out to him, but cannot... .....it.

Q) Write the synonyms of given words

Good luck... ..

Information... ..

On purpose... ..

Splendid... ..

Reply... ..

Fearful .....

Loyal... ..

Q) Write antonyms

Powerful... ..

Grief... ..

Company .....

Ugly .....

Benefit... ..

Strength .....

Q) Write all rhyming words from the poem 'the wind '.

# WORKSHEET 1

## COMPREHENSION

Once upon a time, in a deep forest there lived a cruel and ferocious lion. He killed and ate any animal that came his way. All the animals of the jungle were afraid of him. One day all the animals decided to hold a meeting in order to solve the problem. The wise old owl proposed that each day one animal should go to the lion as his meal. This was not the best of solutions but the animals were tired of living in fear all the time and reluctantly agreed.

Read the comprehension and answer the following questions-

1. Where did the lion live?
2. What kind of a king was the lion?
3. Why were the animals afraid of him?
4. What did the animals of the forest decide to do?



**Army public school**

**Worksheet 2020-21**

**English class 4<sup>th</sup>**

**Subject and predicate**

**1) Underline the subject in following sentences.**

**a) Honesty is the best policy.**

**b) Tell me about your vacation.**

**c) The water in the pond is dirty.**

**d) On the table lay all her toys.**

**2) Complete the sentences using suitable predicates.**

**a) The sun -----**

**b) This book-----**

**c) Children-----**

**d) Very few friends-----**

**3) Match the subject and predicate:**

**Birds is Rudyard Kipling**

**Most of people are closed**

**The shops like to talk about others**

**My favourite author fly**

**INSTRUCTIONS:**

- You can take help of any elder in your family for holding the phone.
- Involve any elder who can observe you while performing this activity.
- The students will record their observation in the table below.

<b>ACTIVITY</b>	<b>Knowledge, clarity and confidence</b>	<b>Recall capacity and Strength</b>	<b>Diagram accuracy</b>	<b>Describing words</b>
<ul style="list-style-type: none"><li>• Draw different breathing organs in living things.</li><li>• Make own video explaining different breathing organs present in living organisms.</li></ul>	<ul style="list-style-type: none"><li>• knowledge</li><li>• clarity</li><li>• confidence</li><li>•</li><li>•</li></ul>	<ul style="list-style-type: none"><li>• Recall</li><li>•</li><li>•</li><li>•</li></ul>	<ul style="list-style-type: none"><li>•</li><li>•</li><li>•</li><li>•</li></ul>	<ul style="list-style-type: none"><li>•</li><li>•</li><li>•</li><li>•</li></ul>

Hindi name of spices	English name of each spice	Medicinal properties of spices

### **INSTRUCTIONS**

- . You can take help of any elder in your family in this activity.
- . Record your observation by filling in given table.

4. Which of the following produces bile?

- ❖ Liver
- ❖ Brain
- ❖ Kidneys
- ❖ Stomach

5. Which of the following throws out waste in the form of urine?

- ❖ Liver
- ❖ Skin
- ❖ Kidneys
- ❖ None of these

**B- Match the following:**

Column A

1. Skull
2. Tendons
3. Small intestine
4. Heart
5. Digestive juice

Column B

- a. Digestion
- b. Protects the brain
- c. Circulatory system
- d. Pancreas and Liver
- e. Connects muscles and bones

**4. Write the following in figures:**

a. Seventy nine thousand and fifty.

b. Twenty nine thousand nine hundred and four.

c. Eighty thousands eighty.

**5. Write the following in number names.**

a. 53459

b. 10079

c. 60089

**6. How many are**

a. Hundreds in 9679

b. Tens in 635

c. Ten thousand in 451234

**7. Compare the numbers and put the appropriate symbol (>, <, =) in the circle provided.**

a. 78,123



78,123

b. 69,123



83,123

**8. Write the greatest and the smallest number of 5 digits with 3, 0 and 5.**

Greatest number:

Smallest number:

**9. Write the greatest number of 5 digits in figures and words.**

**10. Write the smallest number of 5 digits in figures and words.**



.....

Q) Write synonyms of underline words

1) I am a sincere pupil at school... ..

2) The postman gave the letters... ..

3) We did not carry enough water with us... ..

**C- Fill in the blanks:**

1. The brain is connected to all parts of body through a network of \_\_\_\_\_.
2. Breathing in air is called \_\_\_\_\_.
3. \_\_\_\_\_ is breathed out by our lungs.
4. \_\_\_\_\_ Carry blood back to the heart.
5. The \_\_\_\_\_ is the largest organ in the body.

# Worksheet- 2

WORKSHEET

DATE: \_\_\_\_\_

NAME: \_\_\_\_\_

CLASS: \_\_\_\_\_

MARKS: \_\_\_\_\_

1. Fill in the blanks

a) Largest 4-digit number is \_\_\_\_\_.

b) \_\_\_\_\_ tens make a thousand.

c) Successor of 4,556 is \_\_\_\_\_.

d)  $4000 + 300 + 4$  is equal to \_\_\_\_\_.

2. Write the number names of the given numbers

a) 75,805

b) 96,015

3. Write the numeral for the following number names.

a) Forty seven thousand eight hundred and eight

b) Sixty two thousand and ten

4. Write the expanded form for the following

a) 52,40

b) 78,963

5. Arrange in ascending order

3353, 33530, 5330, 5530

Arrange in descending order

28056, 14896, 84236, 45652

# Worksheet-3



## WORKSHEET 3

Arrange the following sets of numbers both in ascending and descending order.

1. 2500, 7200, 3250, 1050, 9700, 7500

Ascending order: \_\_\_\_\_

Descending order: \_\_\_\_\_

2. 6807, 2455, 1210, 2990, 8740, 7411

Ascending order: \_\_\_\_\_

Descending order: \_\_\_\_\_

3. 6000, 2000, 3000, 5000, 1000, 4000

Ascending order: \_\_\_\_\_

Descending order: \_\_\_\_\_

# Worksheet-4

## WORKSHEET

### Find the Mystery Numbers

) The mystery number has ...

- A 1 in the Ten Thousands place.
- A 5 in the Thousands place.
- A 4 in the Tens place.
- A 6 in the Ones place.
- A 7 in the Hundreds place.

What is the mystery number ?

\_\_\_\_\_

) The mystery number has ...

- A 2 in the Ten Thousands place.
- A 7 in the Thousands place.
- A 8 in the Hundreds place.
- A 6 in the Tens place.
- A 5 in the Ones place.

What is the mystery number ?

\_\_\_\_\_

) The mystery number has ...

- A 4 in the Hundreds place.
- A 1 in the Ten Thousands place.
- A 5 in the Ones place.
- A 1 in the Tens place.
- A 7 in the Thousands place.

What is the mystery number ?

\_\_\_\_\_

) The mystery number has ...

- A 5 in the Ten Thousands place.
- A 6 in the Hundreds place.
- A 3 in the Thousands place.
- A 5 in the Tens place.
- A 7 in the Ones place.

What is the mystery number ?

\_\_\_\_\_



# Worksheet-5

## *Revision worksheet*

**CLASS IVth**

**MATHS**

### *Q1 MCQ*

1) *The place value of 5 in 32521 \_\_\_\_\_*

*a) 50 b) 500 c) 5000*

2) *1 more than 1000 is \_\_\_\_\_*

*a) 1001 b) 101 c) 10001*

3) *The greatest 4 digit number is \_\_\_\_\_*

*a)1000 b) 10000 c) 9999*

4) *One hundred thousands is equal to \_\_\_\_\_*

**a) One thousand b) One lakh c) One crore**

**5) The smallest 3- digit number is \_\_\_\_\_**

**a) 999 b) 100 c) 1000**

**6) 1 more than 99999 is \_\_\_\_\_**

- a) smallest 5 digit number**
- b) smallest 4 digit number**
- c) smallest 6 digit number**

**7) How many hundreds are there in 7292 ?**

**a) 7hundreds b) 2 hundreds c) 72 hundreds**

**8) Short form of  $6000+500+30 +9$  is \_\_\_\_\_**

**a) 60539 b) 6539 c) 600539**

**9) The correct break up for 70707 is \_\_\_\_\_**

- a)  $7000 +7000+70$**
- b)  $70000+ 7000+ 7$**
- c)  $70000+700+7$**

**10) The number 14708 has \_\_\_\_\_**

**a) 14 thousands b) 47 hundreds c) 147 tens**

## **Q2 Fill ups :**

- 1) **Twenty thousand two hundred eight \_\_\_\_\_**
- 2) **Seventy nine thousand one hundred nine, \_\_\_\_\_**

## **Q3 Put > or < or = in the blanks:**

- a) **30412..... Thirty thousand four hundred twelve**
- b) **5310.....4510**
- c) **999.....9990**

## **Q4 Which is smaller:**

**92361 or 92306? \_\_\_\_\_**

## **Q5 The short form of :**

**40000+5000+40+6 is \_\_\_\_\_**



**Q6** 3489= \_\_\_\_\_ thousands \_\_\_\_\_  
hundreds \_\_\_\_\_ tens \_\_\_\_\_ ones.

**Q7** Write the numeral of :

5ten thousands, 6 thousands, 0 hundreds ,5  
tens, 4 ones.

**Q8** Write large number using comma 59750 is  
written as \_\_\_\_\_

# Worksheet-6

## *REVISION WORKSHEET –2*

**CLASS IV<sup>th</sup>**

**MATHS**

**1) Write all numbers between**

**a) 17019 and 17025**

**2) Counting by hundreds, write five numbers starting from:**

**a) 53510**

**3) Counting by thousands, write four numbers starting from:**

**a) 88524**

**4) Write the numbers in figures:**

**a) Nine thousand nine hundred ninety six**

**b) Sixty five thousand thirty three**

**5) Find the sum of the place value of 4's in the number,**

**a) 42403**

**6) Write the place value of two 6's in 36561 in words.**

**7) Rewrite the following numbers by interchanging the digits at the tens and ten thousands places.**

**a) 64312    b) 76230**

**8) Write the following in the expanded form:**

**a) 4398    b) 60203**

**9) Rearrange the following numbers in ascending and descending order:**

**a) 10700 , 17100 , 2036 , 476 , 5072**

**b) 11314 , 17314 , 73411 , 70329 , 45069**

**10) Write the greatest and smallest 5 digit number using all the digits from the following:**

**a) 6 , 3 , 1 , 7 , 9**

**11) Write the greatest and smallest 4 digit numbers using all the digits (repetition allowed) from the following:**

**a) 2 , 3 , 9**

**12) Change the position of the digits, if necessary, to get the smallest and greatest 5 digit number**

**a) 95063**

**13) Dodging tables:**

**a)  $6 \times 7 =$**

**b)  $8 \times 5 =$**

**c)  $9 \times 4 =$**

**d)  $12 \times 4 =$**

**e)  $11 \times 9 =$**

**f)  $9 \times 9 =$**

**g)  $7 \times 5 =$**

**h)  $8 \times 6 =$**

**i)  $5 \times 9 =$**

# Ch– 2 Roman Numerals

## Worksheet-1

Q.1. MCQ.... Tick the correct option:

1) Which roman number is never repeated:

(a) X (b) V (c) I

2) Repetition of roman number means:

(a) Addition (b) Subtraction (c) None of these

3) In roman numerals smaller number towards the left of larger number indicates ; *it will be\_\_\_\_\_ larger number.*

(a) Added to (b) Subtracted from (c) Multiplied by

4) In roman numerals M stands for:

(a) 10 (b) 100 (c) 1000

5) XXXII stands for:

(a) 33 (b) 17 (c) None of these

**Q.2. Fill in the blanks:**

- 1) I and X can be repeated at the most \_\_\_\_\_ times.
- 2) It is written only \_\_\_\_\_ to the left of V and X.
- 3) Romans used only \_\_\_\_\_ basic symbols for writing numbers.
- 4) V is never written to the \_\_\_\_\_ of X.
- 5) L is \_\_\_\_\_ than C.

**Q.3. Fill in the blanks using <, > or = to make a correct sentence:**

- (a) XIII \_\_\_\_\_ 11
- (b) XXXV \_\_\_\_\_ 35
- (c) VII \_\_\_\_\_ 12
- (d) XXIII \_\_\_\_\_ 21
- (e) XIX \_\_\_\_\_ 19

**Q.4. Match the following:**

Column A	Column B
XXXV	8
VIII	29
XXIX	27
XV	15
XXVII	35

**Q.5. Write T for true and F for false:**

1)  $15 + 2 = XVII$

2)  $25 - 2 = XX + X - VII$

3)  $12 \times 2 > XXIII$

4)  $13 \times 3 = XX + VII + XII$

5)  $XII + VII + I = V + V + X$

**Q.6. Write the roman numerals for the following:**

1)  $38 =$

2)  $12 =$

3)  $13 =$

4)  $29 =$

5)  $6 =$

**Q.7. Write Hindu- Arabic numerals for the following:**

a)  $X =$

b)  $IX =$

c)  $XXV =$















d)  $XXXI =$

e)  $XIX =$

# Worksheet-2

## EVALUATION SHEET (ROMAN NUMERALS)

1. Write the seven Roman numerals in the circle. Write their corresponding Hindu-Arabic numerals in the box.

Match the numbers.

1. X	•	11
2. XI	•	10
3. XII	•	13
4. XIII	•	12
5. XIV	•	15
6. XV	•	14



Write True (T) or False (F).

1. XVI	=	16	<input checked="" type="radio"/> T
2. VIII	=	9	<input type="radio"/>
3. XIV	=	15	<input type="radio"/>
4. IXI	=	8	<input type="radio"/>
5. XVIII	=	18	<input type="radio"/>
6. IIV	=	3	<input type="radio"/>




# Ch - 3 ADDITION

## Worksheet-1

WORKSHEET

ADD HERE AND THERE



$7 + \underline{\quad} = 17$	$\underline{\quad} + 9 = 18$	$\underline{\quad} + 4 = 13$
$4 + \underline{\quad} = 12$	$\underline{\quad} + 9 = 14$	$\underline{\quad} + 7 = 9$
$\underline{\quad} + 8 = 16$	$6 + \underline{\quad} = 9$	$1 + \underline{\quad} = 5$
$\underline{\quad} + 0 = 4$	$\underline{\quad} + 8 = 8$	$3 + \underline{\quad} = 11$
$1 + 9 = \underline{\quad}$	$8 + \underline{\quad} = 18$	$\underline{\quad} + 9 = 9$
$\underline{\quad} + 7 = 15$	$6 + \underline{\quad} = 7$	$\underline{\quad} + 6 = 11$
$0 + 9 = \underline{\quad}$	$\underline{\quad} + \underline{\quad} = 1$	$\underline{\quad} + 4 = 9$
$4 + \underline{\quad} = 18$	$6 + \underline{\quad} = 20$	$4 + 0 = \underline{\quad}$
$9 + \underline{\quad} = 10$	$6 + \underline{\quad} = 16$	$6 + \underline{\quad} = 5$
$4 + \underline{\quad} = 10$	$10 + \underline{\quad} = 14$	$20 + \underline{\quad} = 21$

Scanned with CamScanner

# Worksheet-2

## Mixed rounding: round numbers to the underlined digit

---

### Grade 4 Rounding Worksheet

Example: 4,689 rounded to the nearest 1,000 is 5,000

Round to the accuracy of the underlined digit.

1. 56,914 = \_\_\_\_\_ 2. 77,453 = \_\_\_\_\_ 3. 63,678 = \_\_\_\_\_

4. 19,113 = \_\_\_\_\_ 5. 15,003 = \_\_\_\_\_ 6. 33,575 = \_\_\_\_\_

7. 33,446 = \_\_\_\_\_ 8. 84,822 = \_\_\_\_\_ 9. 95,150 = \_\_\_\_\_

10. 49,332 = \_\_\_\_\_ 11. 3,655 = \_\_\_\_\_ 12. 97,722 = \_\_\_\_\_

13. 59,899 = \_\_\_\_\_ 14. 32,420 = \_\_\_\_\_ 15. 20,151 = \_\_\_\_\_

16. 21,391 = \_\_\_\_\_ 17. 75,705 = \_\_\_\_\_ 18. 57,311 = \_\_\_\_\_

# Worksheet-3

## 1. Fill in the blanks:

- a. Combining two or more numbers is called \_\_\_\_\_
- b. The numbers that are added are called \_\_\_\_\_
- c. 1 ten = \_\_\_\_ ones
- d. 13880 is round off to the nearest thousands as \_\_\_\_\_
- e. \_\_\_\_\_ + 23140 = 23140 + 14324

## 2. Tick the correct options:

- a. The sum of  $800 + 200$  is
  - i. 1000
  - ii. 900
- b.  $11342 + 11432 =$  \_\_\_\_\_ + 11432
  - i. 11342
  - ii. 1145
- c. Six hundreds + twelve =
  - i. 620
  - ii. 612

## 3. Write the number in column and add

- a. 34612 and 64123
- b. 43190 and 45181

## 4. Round off the following numbers to the nearest thousands:

- a. 3412
- b. 6137

**5. Round off the following numbers to the nearest ten-thousands:**

a. 23816

b. 78417

**6. Fill in the blank boxes:**

Th	H	T	O
5	3		8
3		7	
	0	2	3
Th	H	T	O
6		2	
2	5	1	2
	9		6

**7. Put > or < or = sign in the box:**

a.  $6831 + 1$    $6830$

b.  $4859 + 10$    $4859 - 1$

c.  $736 + 100$    $936$

**8. Read each statement carefully and answer the question:**

Andy's friends had a book reading contest. Among the boys, John read four books, Andrew read 7 books and Andy read 12 books. Among the girls, Nancy read 11 books, Shally read 19 books and Ashley read 13 books.

- a. **How many books did the boys read?**
- b. **How many books did the girls read?**
- c. **Who read more books ,the girls or the boys?**